

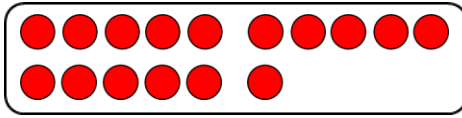
Name:

Klasse:

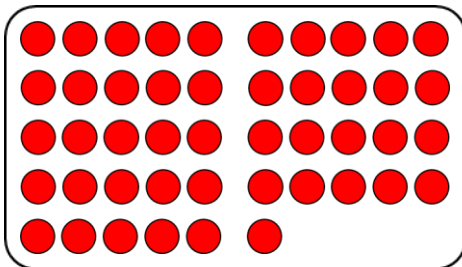

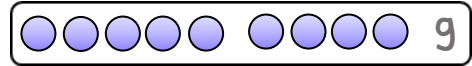
Datum:

Übung: Ergänzen zum Zehner

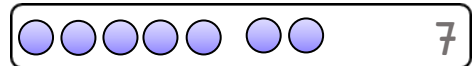
1. Welcher Streifen passt, damit die Reihe voll wird? Verbinde.
Trage immer die fehlende Zahl blau in die Lücke ein.



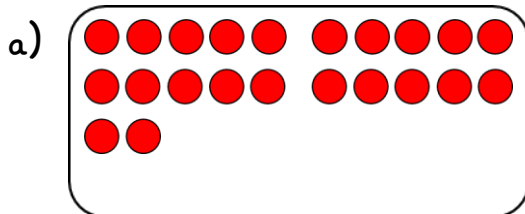
$$16 + 4 = 20$$



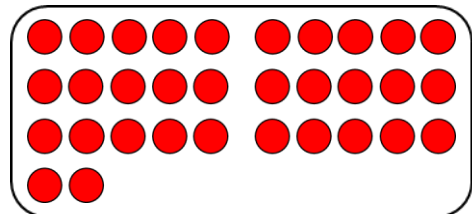
$$46 + 4 = 50$$



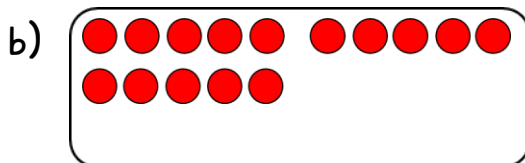
2. Stelle dir vor, welcher Streifen passen würde, damit die Reihe voll wird.
Trage immer die fehlende Zahl blau in die Lücke ein.



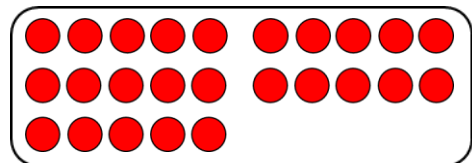
$$22 + 8 = 30$$



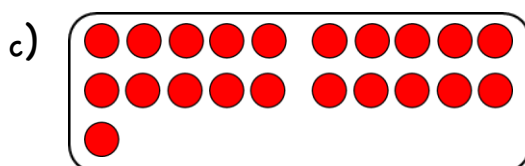
$$32 + 8 = 40$$



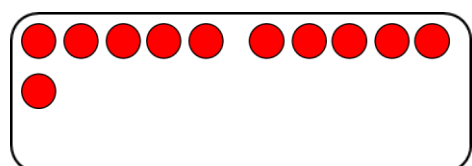
$$15 + 5 = 20$$



$$25 + 5 = 30$$



$$21 + 9 = 30$$



$$11 + 9 = 20$$



3. Rechne die Aufgaben im Kopf.

a) $17 + 3 = 20$

$37 + 3 = 40$

b) $23 + 7 = 30$

$43 + 7 = 50$

c) $38 + 2 = 40$

$48 + 2 = 50$

d) $46 + 4 = 50$

$56 + 4 = 60$

e) $32 + 8 = 40$

$62 + 8 = 70$

f) $24 + 6 = 30$

$74 + 6 = 80$

g) $75 + 5 = 80$

$85 + 5 = 90$

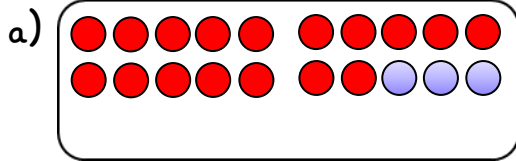
h) $51 + 9 = 60$

$41 + 9 = 50$

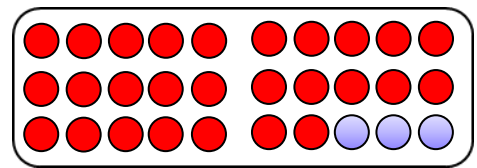
i) $89 + 1 = 90$

$19 + 1 = 20$

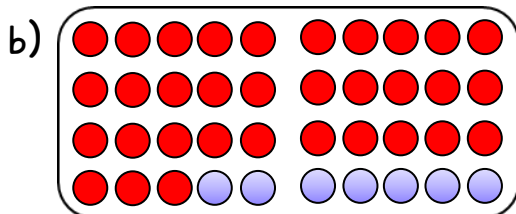
4. Die blauen Punkte sollen weggenommen werden. Wie viele rote Punkte bleiben noch übrig? Schreibe die Zahl rot auf.



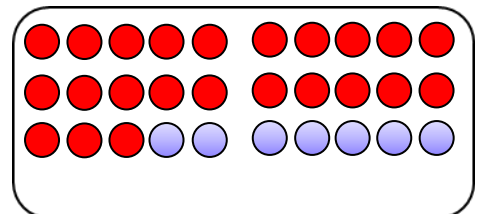
$20 - 3 = 17$



$30 - 3 = 27$



$40 - 7 = 33$



$30 - 7 = 23$

5. Rechne die Aufgaben im Kopf.

a) $20 - 4 = 16$

$30 - 4 = 26$

b) $40 - 6 = 34$

$50 - 6 = 44$

c) $30 - 8 = 22$

$40 - 8 = 32$

d) $60 - 2 = 58$

$30 - 2 = 28$

e) $50 - 5 = 45$

$20 - 5 = 15$

f) $40 - 9 = 31$

$80 - 9 = 71$