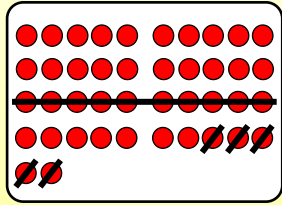


Name:

Klasse:

Datum:

## Subtrahieren bis 100 mit Zehnerübergang 2



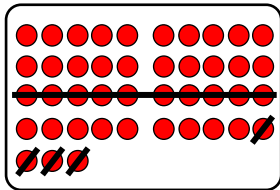
$$42 - 15 = 27$$

$$42 - 10 = 32$$

$$32 - 5 = 27$$

Subtrahiere bei zweistelligen Zahlen erst die Zehner und dann die Einer.

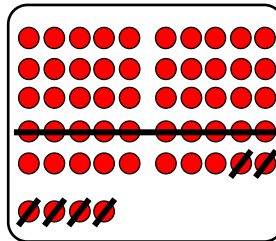
1. Subtrahiere erst die Zehner und danach die Einer.



a)  $43 - 14 =$  \_\_\_\_\_

$43 - 10 =$  \_\_\_\_\_

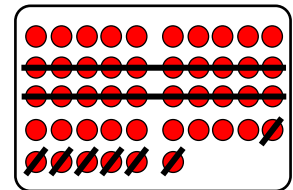
\_\_\_\_\_ - \_\_\_\_\_ = \_\_\_\_\_



b)  $54 - 16 =$  \_\_\_\_\_

\_\_\_\_\_ - \_\_\_\_\_ = \_\_\_\_\_

\_\_\_\_\_ - \_\_\_\_\_ = \_\_\_\_\_

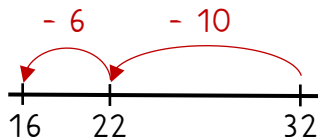


c)  $46 - 27 =$  \_\_\_\_\_

\_\_\_\_\_ - \_\_\_\_\_ = \_\_\_\_\_

\_\_\_\_\_ - \_\_\_\_\_ = \_\_\_\_\_

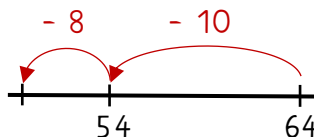
2. Der Rechenstrich zeigt die Rechenschritte: Subtrahiere erst die Zehner, und dann die Einer. (Beginne am Rechenstrich rechts.)



a)  $32 - 16 =$  \_\_\_\_\_

$32 - 10 =$  \_\_\_\_\_

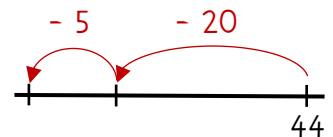
\_\_\_\_\_ - \_\_\_\_\_ = \_\_\_\_\_



b)  $64 - 18 =$  \_\_\_\_\_

\_\_\_\_\_ - \_\_\_\_\_ = \_\_\_\_\_

\_\_\_\_\_ - \_\_\_\_\_ = \_\_\_\_\_



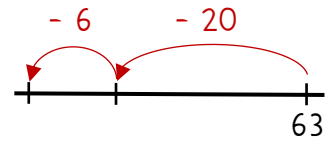
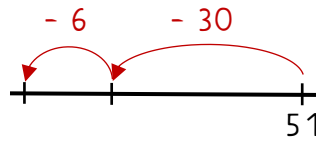
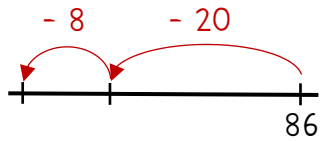
c)  $44 - 25 =$  \_\_\_\_\_

\_\_\_\_\_ - \_\_\_\_\_ = \_\_\_\_\_

\_\_\_\_\_ - \_\_\_\_\_ = \_\_\_\_\_



3. Erst die Zehner, dann die Einer - der Rechenstrich hilft dir.



a)  $86 - 28 =$  \_\_\_\_\_  
 \_\_\_\_\_ - \_\_\_\_\_ = \_\_\_\_\_  
 \_\_\_\_\_ - \_\_\_\_\_ = \_\_\_\_\_

b)  $51 - 36 =$  \_\_\_\_\_  
 \_\_\_\_\_ - \_\_\_\_\_ = \_\_\_\_\_  
 \_\_\_\_\_ - \_\_\_\_\_ = \_\_\_\_\_

c)  $63 - 26 =$  \_\_\_\_\_  
 \_\_\_\_\_ - \_\_\_\_\_ = \_\_\_\_\_  
 \_\_\_\_\_ - \_\_\_\_\_ = \_\_\_\_\_

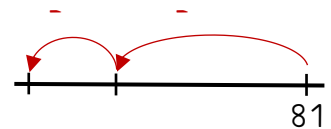
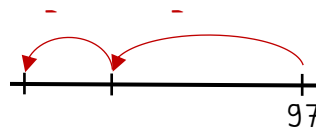
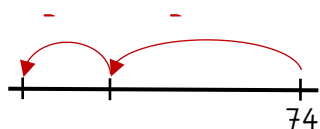
4. Subtrahiere erst die Zehner und dann die Einer.

a)  $45 - 18 =$  \_\_\_\_\_  
 \_\_\_\_\_ - \_\_\_\_\_ = \_\_\_\_\_  
 \_\_\_\_\_ - \_\_\_\_\_ = \_\_\_\_\_

b)  $72 - 54 =$  \_\_\_\_\_  
 \_\_\_\_\_ - \_\_\_\_\_ = \_\_\_\_\_  
 \_\_\_\_\_ - \_\_\_\_\_ = \_\_\_\_\_

c)  $83 - 19 =$  \_\_\_\_\_  
 \_\_\_\_\_ - \_\_\_\_\_ = \_\_\_\_\_  
 \_\_\_\_\_ - \_\_\_\_\_ = \_\_\_\_\_

5. Ergänze die Schritte am Rechenstrich und rechne aus.



a)  $74 - 47 =$  \_\_\_\_\_

b)  $97 - 39 =$  \_\_\_\_\_

c)  $81 - 56 =$  \_\_\_\_\_

6. Subtrahiere im Kopf.

a)  $58 - 29 =$  \_\_\_\_\_  
 $65 - 47 =$  \_\_\_\_\_  
 $43 - 15 =$  \_\_\_\_\_  
 $74 - 36 =$  \_\_\_\_\_

b)  $81 - 62 =$  \_\_\_\_\_  
 $46 - 29 =$  \_\_\_\_\_  
 $72 - 35 =$  \_\_\_\_\_  
 $83 - 17 =$  \_\_\_\_\_

c)  $52 - 27 =$  \_\_\_\_\_  
 $75 - 59 =$  \_\_\_\_\_  
 $61 - 46 =$  \_\_\_\_\_  
 $94 - 56 =$  \_\_\_\_\_