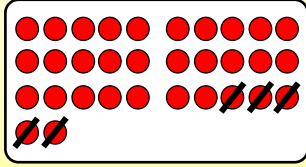


Name:

Klasse:

Datum:

Subtrahieren bis 100 - Zehnerübergang 1



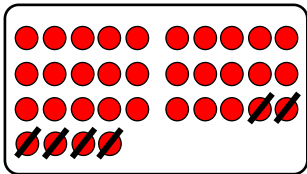
Rechne immer zuerst zum nächsten Zehner und danach den Rest.

$$32 - 5 = 27$$

$$32 - 2 = 30$$

$$30 - 3 = 27$$

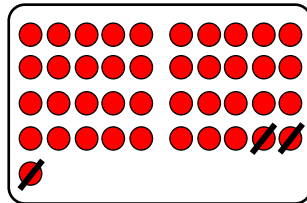
1. Rechne bei jeder Aufgabe zuerst bis zum nächsten Zehner und subtrahiere danach den Rest.



a) $34 - 6 =$ _____

$34 - \underline{\quad} = \underline{\quad}$

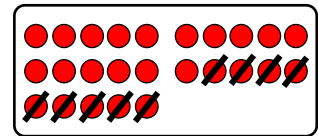
$\underline{\quad} - \underline{\quad} = \underline{\quad}$



b) $41 - 3 =$ _____

$\underline{\quad} - \underline{\quad} = \underline{\quad}$


$\underline{\quad} - \underline{\quad} = \underline{\quad}$



c) $25 - 9 =$ _____

$\underline{\quad} - \underline{\quad} = \underline{\quad}$

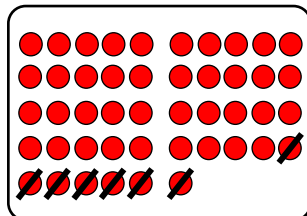
$\underline{\quad} - \underline{\quad} = \underline{\quad}$



d) $72 - 8 =$ _____

$\underline{\quad} - \underline{\quad} = \underline{\quad}$

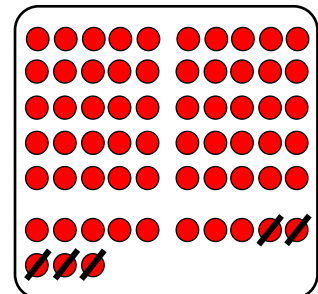
$\underline{\quad} - \underline{\quad} = \underline{\quad}$



e) $46 - 7 =$ _____

$\underline{\quad} - \underline{\quad} = \underline{\quad}$

$\underline{\quad} - \underline{\quad} = \underline{\quad}$




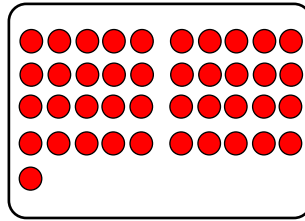

f) $63 - 5 =$ _____

$\underline{\quad} - \underline{\quad} = \underline{\quad}$

$\underline{\quad} - \underline{\quad} = \underline{\quad}$



2. Streiche Punkte weg. Rechne immer erst bis zum Zehner.



a) $93 - 6 =$ _____

_____ - _____ = _____

_____ - _____ = _____

b) $41 - 7 =$ _____

_____ - _____ = _____

_____ - _____ = _____

c) $74 - 5 =$ _____

_____ - _____ = _____

_____ - _____ = _____

3. Rechne immer zuerst bis zum Zehner und danach den Rest.

a) $26 - 9 =$ _____

_____ - _____ = _____

_____ - _____ = _____

b) $75 - 7 =$ _____

_____ - _____ = _____

_____ - _____ = _____

c) $32 - 6 =$ _____

_____ - _____ = _____

_____ - _____ = _____

d) $64 - 9 =$ _____

_____ - _____ = _____

_____ - _____ = _____

e) $48 - 9 =$ _____

_____ - _____ = _____

_____ - _____ = _____

f) $51 - 5 =$ _____

_____ - _____ = _____

_____ - _____ = _____

4. Rechne im Kopf zuerst bis zum Zehner und danach den Rest.

a) $35 - 8 =$ _____

$43 - 7 =$ _____

$91 - 4 =$ _____

$84 - 8 =$ _____

b) $67 - 9 =$ _____

$52 - 7 =$ _____

$76 - 8 =$ _____

$33 - 9 =$ _____

c) $92 - 4 =$ _____

$73 - 8 =$ _____

$61 - 6 =$ _____

$85 - 6 =$ _____