

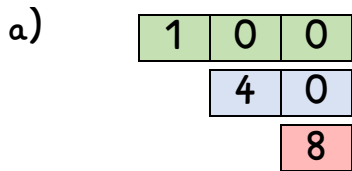
Name:

Klasse:

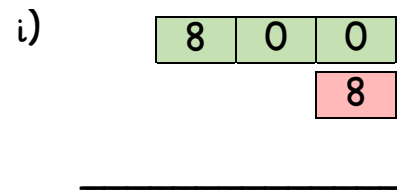
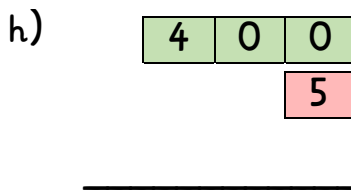
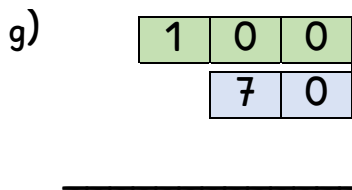
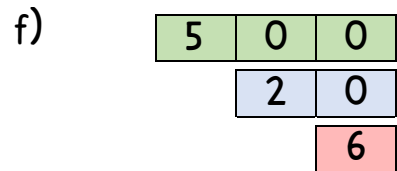
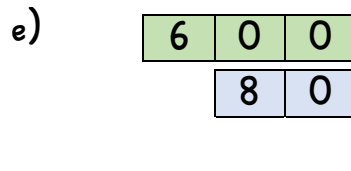
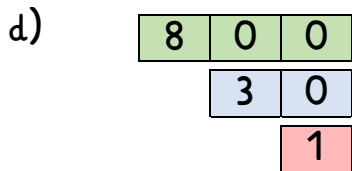
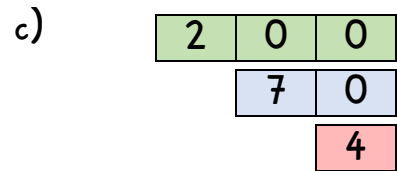
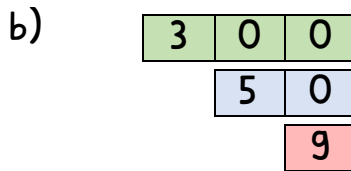
Datum:

Zahlen bis 1000 aufbauen und zerlegen

1. Lege die Zahlenkarten zusammen. Welche Zahl entsteht?

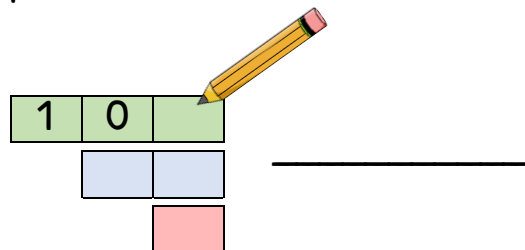


148

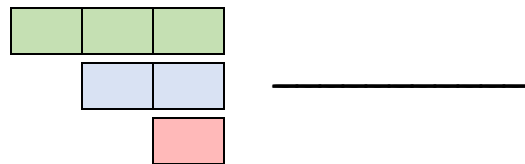


2. Lies die Zahlen und schreibe sie auf.

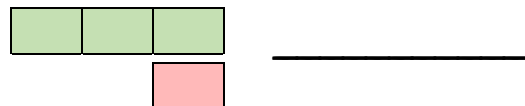
einhundertzweiundneunzig



vierhundertdreiundfünfzig



achthundertsieben



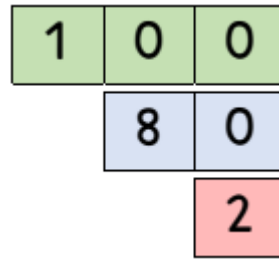
3. Rechne aus. Du kannst die Aufgaben auch mit Zahlenkarten legen.

a) $100 + 80 + 2 =$ _____

$400 + 90 + 7 =$ _____

$600 + 40 + 1 =$ _____

$200 + 30 + 5 =$ _____



b) $900 + 10 + 9 =$ _____

$300 + 6 =$ _____

$900 + 80 =$ _____

$800 + 80 + 1 =$ _____

c) $50 + 4 =$ _____

$900 + 90 + 4 =$ _____

$100 + 1 =$ _____

$400 + 70 =$ _____

4. Zerlege die Zahlen.

a) $204 =$ 200 + 4

$105 =$ _____

$835 =$ _____

$760 =$ _____

$34 =$ _____

b) $377 =$ _____

$505 =$ _____

$610 =$ _____

$87 =$ _____

$212 =$ _____

5. Ergänze die Zerlegungen. Welche Zahl fehlt?

a) $659 = 600 + 9 +$ _____

$248 = 200 + 40 +$ _____

$303 = 300 +$ _____

$777 = 700 + 7 +$ _____

b) $520 = 20 +$ _____

$101 = 1 +$ _____

$460 = 400 +$ _____

$538 = 500 + 8 +$ _____



Schneide die Zahlenkarten aus und nutze sie für die Aufgaben.

