

Name:

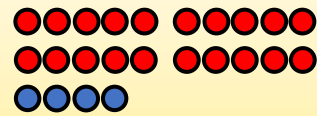
Klasse:

Datum:


Schrittweise Plus rechnen

Zerlege die rechte Zahl in **Zehner** und **Einer**. Rechne dann beides nacheinander dazu.


$$\begin{array}{r} 45 + 24 = 69 \\ 45 + 20 = 65 \\ 65 + 4 = 69 \end{array}$$



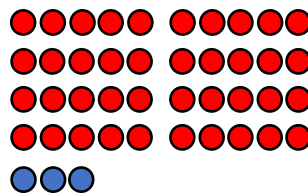
$$24 = 20 + 4$$



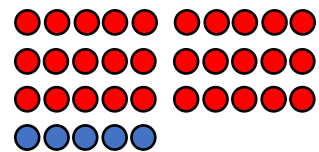
1. Rechne nacheinander in Schritten, wie der Igel. Das Punktefeld hilft dir beim Zerlegen in **Zehner** und **Einer**.



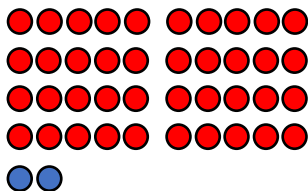
3	1	+	2	6	=	5	7
3	1	+	2	0	=	5	1
5	1	+	6	=	5	7	



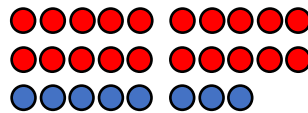
4	5	+	4	3	=	8	8
4	5	+	4	0	=	8	5
8	5	+	3	=	8	8	



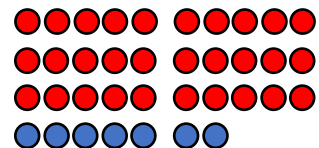
6	2	+	3	5	=	9	7
6	2	+	3	0	=	9	2
9	2	+	5	=	9	7	



2	9	+	4	2	=	7	1
2	9	+	4	0	=	6	9
6	9	+	2	=	7	1	



5	5	+	2	8	=	8	3
5	5	+	2	0	=	7	5
7	5	+	8	=	8	3	



4	7	+	3	7	=	8	4
4	7	+	3	0	=	7	7
7	7	+	7	=	8	4	




2. Rechne mit **Zehnern** und **Einern** in Schritten, wie der Igel.

$72 + 14 = 86$	$55 + 34 = 89$	$41 + 48 = 89$
$72 + 10 = 82$	$55 + 30 = 85$	$41 + 40 = 81$
$82 + 4 = 86$	$85 + 4 = 89$	$81 + 8 = 89$
$28 + 18 = 46$	$35 + 46 = 81$	$63 + 34 = 97$
$28 + 10 = 38$	$35 + 40 = 75$	$63 + 30 = 93$
$38 + 8 = 46$	$75 + 6 = 81$	$93 + 4 = 97$
$46 + 36 = 82$	$74 + 16 = 90$	$53 + 28 = 81$
$46 + 30 = 76$	$74 + 10 = 84$	$53 + 20 = 73$
$76 + 6 = 82$	$84 + 6 = 90$	$73 + 8 = 81$
$22 + 69 = 91$	$64 + 28 = 92$	$37 + 46 = 83$
$22 + 60 = 82$	$64 + 20 = 84$	$37 + 40 = 77$
$82 + 9 = 91$	$84 + 8 = 92$	$77 + 6 = 83$

Manchmal ist es schlau, mit **Nachbarzahlen** zu rechnen. Rechne erst 1 zu viel dazu. Ziehe danach wieder ab, was zu viel war.

$$\begin{aligned} 34 + 49 &= 83 \\ 34 + 50 &= 84 \\ 84 - 1 &= 83 \end{aligned}$$



3. Rechne mit **Nachbarzahlen**, wie der Bär.

$67 + 19 = 86$	$48 + 39 = 87$	$26 + 29 = 55$
$67 + 20 = 87$	$48 + 40 = 88$	$26 + 30 = 56$
$67 - 1 = 86$	$88 - 1 = 87$	$56 - 1 = 55$
$34 + 59 = 93$	$13 + 79 = 92$	$22 + 49 = 71$
$34 + 60 = 94$	$13 + 80 = 93$	$22 + 50 = 72$
$94 - 1 = 93$	$93 - 1 = 92$	$72 - 1 = 71$

