

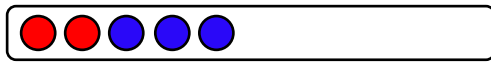
Name:

Klasse:

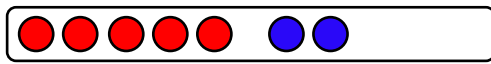

Datum:

## Plusaufgaben bis 10

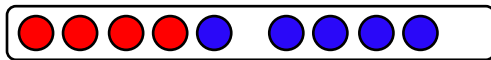
1. Rechne aus. Die roten und blauen Punkte helfen dir.



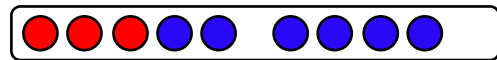
$$2 + 3 = \underline{\quad}$$



$$5 + 2 = \underline{\quad}$$

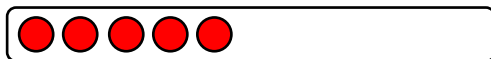


$$4 + 4 = \underline{\quad}$$

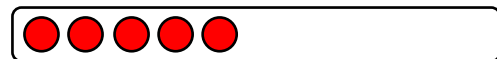


$$3 + 6 = \underline{\quad}$$

2. Rechne aus. Stelle dir die blauen Punkte im Kopf vor.



$$5 + 4 = \underline{\quad}$$



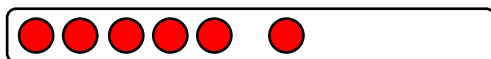
$$5 + 3 = \underline{\quad}$$




$$3 + 4 = \underline{\quad}$$



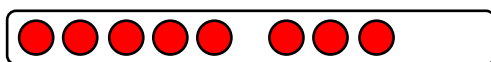
$$4 + 2 = \underline{\quad}$$



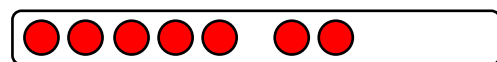
$$6 + 2 = \underline{\quad}$$



$$3 + 2 = \underline{\quad}$$

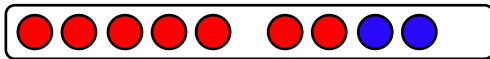


$$8 + 1 = \underline{\quad}$$



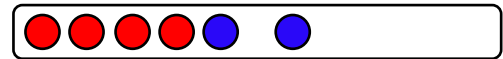
$$7 + 3 = \underline{\quad}$$

3. Rechne aus und schreibe die Tauschaufgabe dazu.



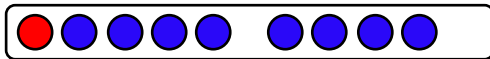
$$7 + 2 = \underline{\quad}$$

$$2 + 7 = \underline{\quad}$$



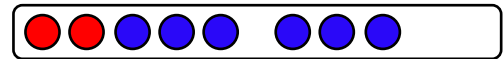
$$4 + 2 = \underline{\quad}$$

$$2 + \underline{\quad} = \underline{\quad}$$



$$1 + 8 = \underline{\quad}$$

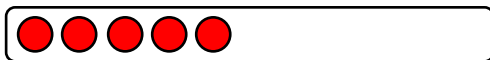
$$\underline{\quad} + \underline{\quad} = \underline{\quad}$$



$$2 + 6 = \underline{\quad}$$

$$\underline{\quad} + \underline{\quad} = \underline{\quad}$$

4. Rechne immer zuerst die leichtere Aufgabe.




$$5 + 1 = \underline{\quad}$$

$$1 + 5 = \underline{\quad}$$




$$4 + 2 = \underline{\quad}$$

$$2 + 4 = \underline{\quad}$$



$$2 + 5 = \underline{\quad}$$

$$5 + 2 = \underline{\quad}$$



$$3 + 4 = \underline{\quad}$$

$$4 + 3 = \underline{\quad}$$

5. Rechne aus. Rechne immer erst die leichtere Aufgabe.

a)  $3 + 1 = \underline{\quad}$

$1 + 3 = \underline{\quad}$

b)  $4 + 5 = \underline{\quad}$

$5 + 4 = \underline{\quad}$

c)  $3 + 2 = \underline{\quad}$

$2 + 3 = \underline{\quad}$

d)  $3 + 5 = \underline{\quad}$

$5 + 3 = \underline{\quad}$

e)  $7 + 3 = \underline{\quad}$

$3 + 7 = \underline{\quad}$

f)  $2 + 7 = \underline{\quad}$

$7 + 2 = \underline{\quad}$