

Name:

Klasse:


Datum:

Minusaufgaben bis 10

1. Rechne aus. Die zweite Zahl zeigt immer, wie viele Punkte weggenommen werden.




$$5 - 2 = 3$$



$$9 - 4 = 5$$



$$6 - 3 = 3$$



$$8 - 6 = 2$$

2. Rechne aus. Streiche die Punkte, die weggenommen werden.



$$3 - 2 = 1$$



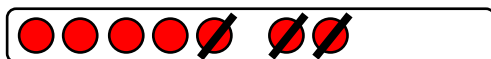
$$5 - 4 = 1$$



$$10 - 6 = 4$$



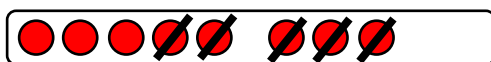
$$4 - 2 = 2$$



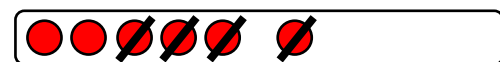
$$7 - 3 = 4$$



$$5 - 3 = 2$$



$$8 - 5 = 3$$



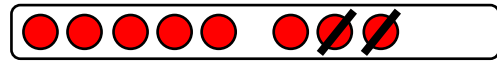
$$6 - 4 = 2$$



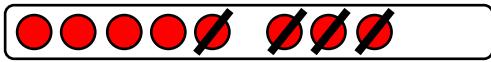
3. Zeichne immer erst die Aufgabe und rechne dann aus.




$$5 - 4 = 1$$



$$8 - 2 = 6$$




$$8 - 4 = 4$$



$$10 - 5 = 5$$



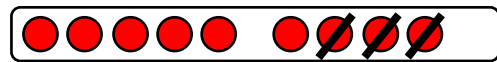
$$6 - 2 = 4$$



$$7 - 2 = 5$$



$$10 - 7 = 3$$



$$9 - 3 = 6$$



$$7 - 5 = 2$$



$$8 - 6 = 2$$

5. Falte das Blatt an der gestrichelten Linie und rechne aus.
Rechne immer erst die leichtere Aufgabe.

a) $8 - 3 = 5$

b) $10 - 3 = 7$

c) $5 - 2 = 3$

$4 - 3 = 1$

$10 - 4 = 6$

$7 - 4 = 3$

$6 - 3 = 3$

$10 - 2 = 8$

$3 - 2 = 1$

$3 - 1 = 2$

$10 - 9 = 1$

$9 - 6 = 3$

$7 - 6 = 1$

$10 - 6 = 4$

$4 - 2 = 2$

$9 - 4 = 5$

$10 - 8 = 2$

$8 - 5 = 3$

