

Name:

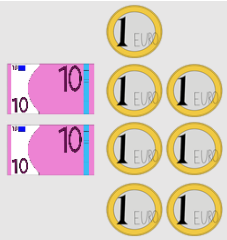
Klasse:

Datum:


## Addieren bis 1000: Vertiefung

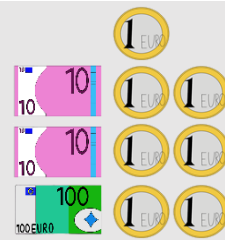
1. Löse die Rechenaufgaben. Beachte dabei ihre Ähnlichkeiten.

a)

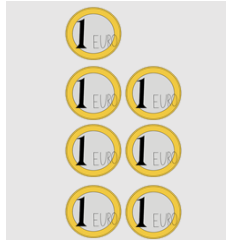


$24 + 7 = \underline{31}$






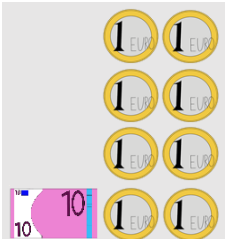
$\underline{124} + 7 = \underline{131}$




b)




$\underline{12} + \underline{18} = \underline{30}$

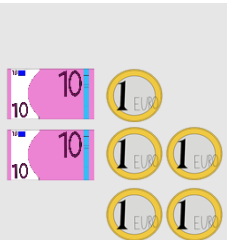




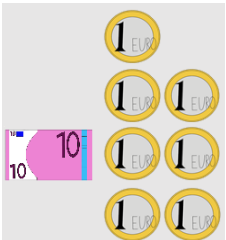
$\underline{112} + \underline{18} = \underline{130}$

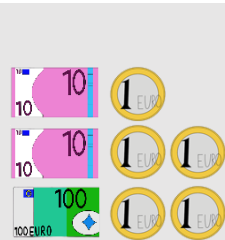


c)

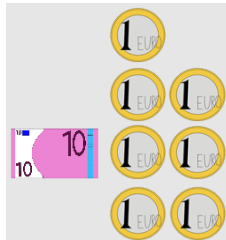


$\underline{25} + \underline{17} = \underline{42}$





$\underline{125} + \underline{17} = \underline{142}$



2. Die erste Aufgabe hilft dir, die anderen beiden zu lösen.

a)  $47 + 8 = \underline{55}$     b)  $88 + 6 = \underline{94}$     c)  $25 + 25 = \underline{94}$   
 $147 + 8 = \underline{155}$      $388 + 6 = \underline{394}$      $525 + 25 = \underline{394}$   
 $247 + 8 = \underline{255}$      $788 + 6 = \underline{794}$      $925 + 25 = \underline{794}$

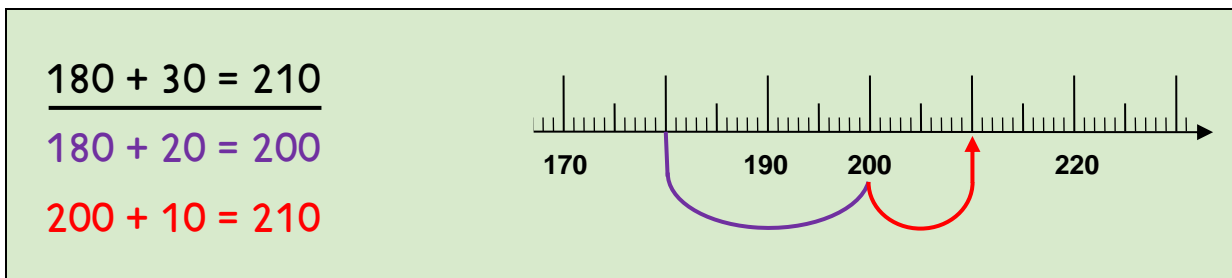
d)  $33 + 17 = \underline{50}$     e)  $65 + 27 = \underline{92}$     f)  $54 + 17 = \underline{92}$   
 $433 + 17 = \underline{450}$      $465 + 27 = \underline{492}$      $254 + 17 = \underline{492}$   
 $133 + 17 = \underline{150}$      $265 + 27 = \underline{292}$      $754 + 17 = \underline{292}$



3. Rechne bis zum Hunderter.

a)  $160 + \underline{40} = 200$     b)  $240 + \underline{60} = 300$     c)  $730 + \underline{70} = 800$   
 $560 + \underline{40} = 600$      $170 + \underline{30} = 200$      $350 + \underline{50} = 400$   
 $860 + \underline{40} = 900$      $620 + \underline{80} = 700$      $510 + \underline{90} = 600$

4. Rechne erst zum Hunderter und addiere den Rest danach.



a)  $\underline{190 + 40 = 230}$     b)  $\underline{250 + 90 = 340}$     c)  $\underline{630 + 80 = 710}$   
 $190 + 10 = \underline{200}$      $250 + 50 = \underline{300}$      $630 + 70 = \underline{700}$   
 $200 + 30 = \underline{230}$      $300 + 40 = \underline{340}$      $700 + 10 = \underline{710}$

4. Rechne im Kopf erst bis zum Hunderter und addiere den Rest danach.

a)  $370 + 40 = \underline{410}$     b)  $480 + 90 = \underline{570}$     c)  $120 + 90 = \underline{210}$   
 $560 + 80 = \underline{640}$      $270 + 50 = \underline{320}$      $850 + 80 = \underline{930}$   
 $740 + 80 = \underline{820}$      $660 + 70 = \underline{730}$      $770 + 60 = \underline{830}$

5. Rechne erst zum Hunderter und addiere den Rest danach.

a)  $\underline{198 + 3 = 201}$     b)  $\underline{796 + 8 = 804}$     c)  $\underline{594 + 9 = 603}$   
 $198 + 2 = \underline{200}$      $796 + 4 = \underline{800}$      $594 + \underline{6} = \underline{600}$   
 $200 + 1 = \underline{201}$      $796 + \underline{4} = \underline{804}$      $600 + \underline{3} = \underline{603}$

a)  $397 + 5 = \underline{402}$     b)  $495 + 7 = \underline{502}$     c)  $197 + 7 = \underline{204}$   
 $593 + 8 = \underline{601}$      $298 + 9 = \underline{307}$      $893 + 8 = \underline{901}$   
 $896 + 6 = \underline{902}$      $694 + 8 = \underline{702}$      $792 + 9 = \underline{801}$