

Name:

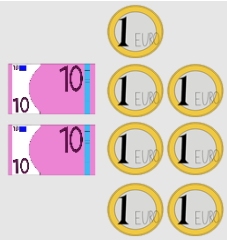
Klasse:

Datum:

Addieren bis 1000: Vertiefung

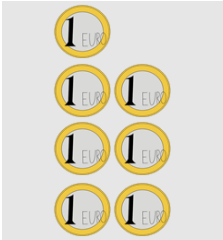
1. Löse die Rechenaufgaben. Beachte dabei ihre Ähnlichkeiten.

a)



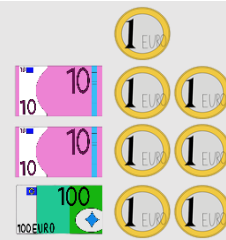
24

+

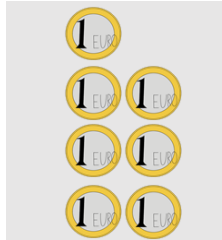


7

=




+



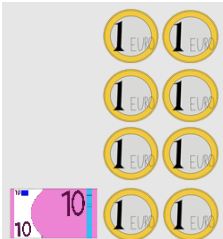
7

=


b)




+



=

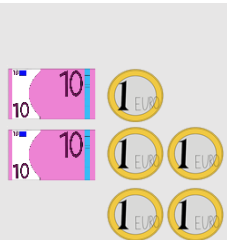


+

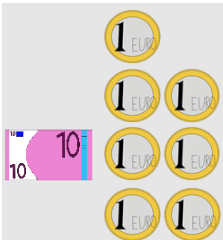


=

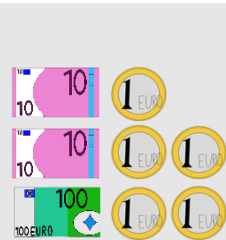
c)



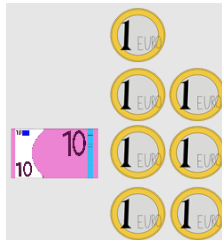
+



=



+



=

2. Die erste Aufgabe hilft dir, die anderen beiden zu lösen.

a) $47 + 8 = \underline{\quad}$	b) $88 + 6 = \underline{\quad}$	c) $25 + 25 = \underline{\quad}$
$147 + 8 = \underline{\quad}$	$388 + 6 = \underline{\quad}$	$525 + 25 = \underline{\quad}$
$247 + 8 = \underline{\quad}$	$788 + 6 = \underline{\quad}$	$925 + 25 = \underline{\quad}$
d) $33 + 17 = \underline{\quad}$	e) $65 + 27 = \underline{\quad}$	f) $54 + 17 = \underline{\quad}$
$433 + 17 = \underline{\quad}$	$465 + 27 = \underline{\quad}$	$254 + 17 = \underline{\quad}$
$133 + 17 = \underline{\quad}$	$265 + 27 = \underline{\quad}$	$754 + 17 = \underline{\quad}$



3. Rechne bis zum Hunderter.

a) $160 + \underline{\quad} = 200$	b) $240 + \underline{\quad} = 300$	c) $730 + \underline{\quad} = 800$
$560 + \underline{\quad} = 600$	$170 + \underline{\quad} = 200$	$350 + \underline{\quad} = 400$
$860 + \underline{\quad} = 900$	$620 + \underline{\quad} = 700$	$510 + \underline{\quad} = 600$

4. Rechne erst zum Hunderter und addiere den Rest danach.

$\begin{array}{r} 180 + 30 = 210 \\ \hline 180 + 20 = 200 \\ 200 + 10 = 210 \end{array}$	
--	--

a) $\underline{190 + 40 = \underline{\quad}}$	b) $\underline{250 + 90 = \underline{\quad}}$	c) $\underline{630 + 80 = \underline{\quad}}$
$190 + 10 = \underline{\quad}$	$250 + 50 = \underline{\quad}$	$630 + 70 = \underline{\quad}$
$200 + 30 = \underline{\quad}$	$300 + 40 = \underline{\quad}$	$700 + 10 = \underline{\quad}$

4. Rechne im Kopf erst bis zum Hunderter und addiere den Rest danach.

a) $370 + 40 = \underline{\quad}$	b) $480 + 90 = \underline{\quad}$	c) $120 + 90 = \underline{\quad}$
$560 + 80 = \underline{\quad}$	$270 + 50 = \underline{\quad}$	$850 + 80 = \underline{\quad}$
$740 + 80 = \underline{\quad}$	$660 + 70 = \underline{\quad}$	$770 + 60 = \underline{\quad}$

5. Rechne erst zum Hunderter und addiere den Rest danach.

a) $\underline{198 + 3 = \underline{\quad}}$	b) $\underline{796 + 8 = \underline{\quad}}$	c) $\underline{594 + 9 = \underline{\quad}}$
$198 + 2 = \underline{\quad}$	$796 + 4 = \underline{\quad}$	$594 + \underline{\quad} = \underline{\quad}$
$200 + 1 = \underline{\quad}$	$796 + \underline{\quad} = \underline{\quad}$	$600 + \underline{\quad} = \underline{\quad}$
a) $397 + 5 = \underline{\quad}$	b) $495 + 7 = \underline{\quad}$	c) $197 + 7 = \underline{\quad}$
$593 + 8 = \underline{\quad}$	$298 + 9 = \underline{\quad}$	$893 + 8 = \underline{\quad}$
$896 + 6 = \underline{\quad}$	$694 + 8 = \underline{\quad}$	$792 + 9 = \underline{\quad}$