

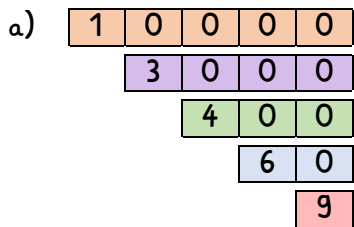
Name:

Klasse:

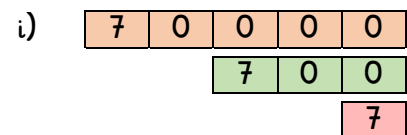
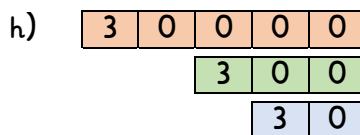
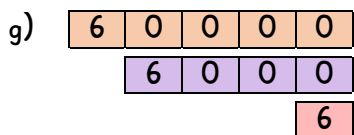
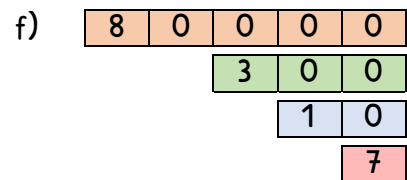
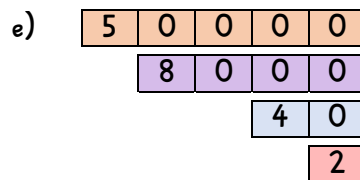
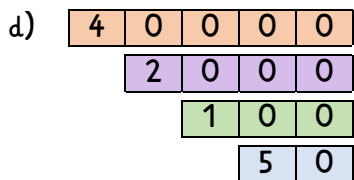
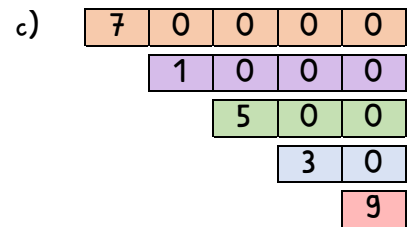
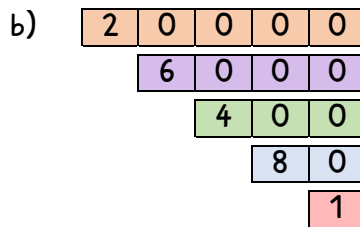
Datum:

Zahlen bis 100 000 aufbauen und zerlegen

1. Welche Zahl entsteht, wenn die Zahlenkarten zusammengelegt werden?

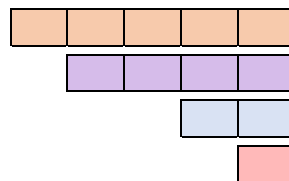


13 469

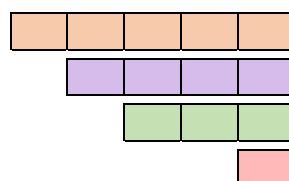


2. Lies die Zahlen und schreibe sie auf.

zweiundvierzigtausenddreihundzwanzig



siebenundfünfzigtausenddreihundertvier



3. Rechne aus. Du kannst die Aufgaben auch mit Zahlenkarten legen.

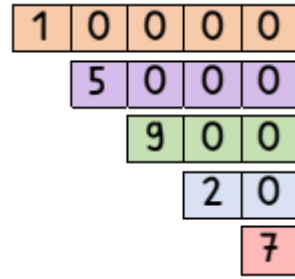
a) $10\,000 + 5\,000 + 900 + 20 + 7 =$ _____

$60\,000 + 2\,000 + 800 + 30 + 5 =$ _____

$70\,000 + 5\,000 + 200 + 30 + 4 =$ _____

$20\,000 + 9\,000 + 300 + 80 + 7 =$ _____

$80\,000 + 3\,000 + 500 + 10 + 2 =$ _____



b) $30\,000 + 5\,000 + 10 =$ _____

$20\,000 + 200 + 2 =$ _____

$90\,000 + 1\,000 + 800 =$ _____

$80\,000 + 80 + 1 =$ _____

$40\,000 + 9\,000 + 40 =$ _____

c) $30\,000 + 7\,000 =$ _____

$60\,000 + 100 =$ _____

$10\,000 + 90 =$ _____

$50\,000 + 5 =$ _____

$20\,000 + 30 =$ _____

4. Zerlege die Zahlen.

a) $10\,394 = 10\,000 + 300 + 90 + 4$ _____

$30\,842 =$ _____

$84\,006 =$ _____

$31\,020 =$ _____

$40\,503 =$ _____

$90\,099 =$ _____

b) $11\,002 =$ _____

$30\,330 =$ _____

$72\,600 =$ _____

$68\,050 =$ _____

$22\,002 =$ _____

$80\,509 =$ _____

5. Ergänze die Zerlegungen.

a) $34\,456 = 30\,000 + 4\,000 + 400 + 50 +$ _____

b) $58\,653 = 8\,000 + 600 + 50 + 3 +$ _____

c) $86\,111 = 80\,000 + 6\,000 + 10 + 1 +$ _____

d) $77\,677 = 70\,000 + 7\,000 + 600 + 7 +$ _____

e) $44\,444 = 40\,000 + 400 + 40 + 4 +$ _____

