

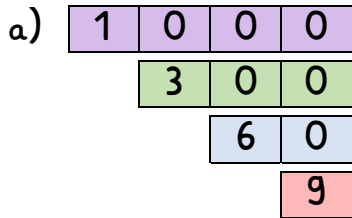
Name:

Klasse:

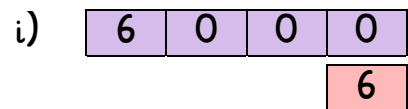
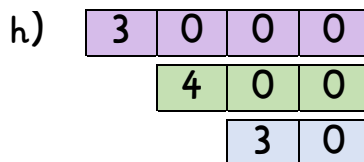
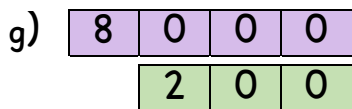
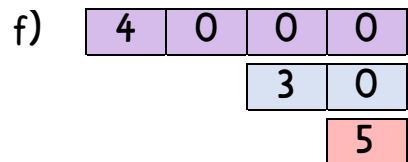
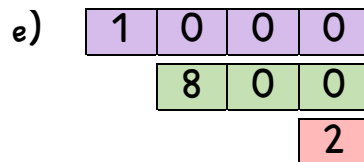
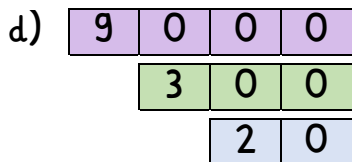
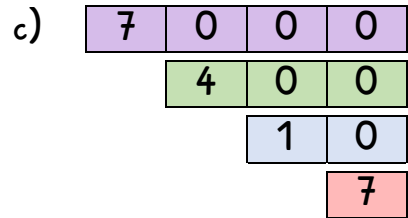
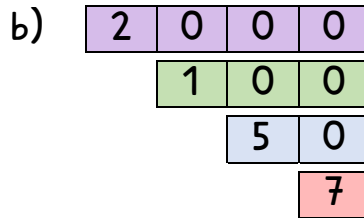
Datum:

Zahlen bis 10 000 aufbauen und zerlegen

1. Welche Zahl entsteht, wenn die Zahlenkarten zusammengelegt werden?

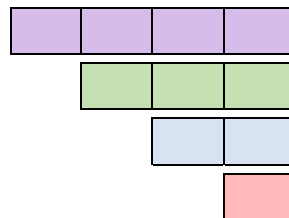


1369

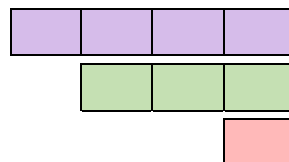


2. Lies die Zahlen und schreibe sie auf.

siebentausendeinhundertachtunddreißig



fünftausendsiebenhundertdrei





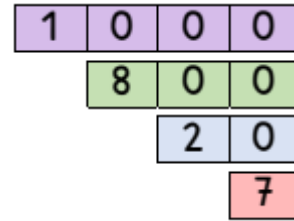
3. Rechne aus. Du kannst die Aufgaben auch mit Zahlenkarten legen.

a) $1000 + 800 + 20 + 7 =$ _____

$7000 + 900 + 40 + 3 =$ _____

$6000 + 400 + 10 + 4 =$ _____

$2000 + 300 + 80 + 7 =$ _____



b) $4000 + 100 + 90 =$ _____

$2000 + 700 + 5 =$ _____

$9000 + 30 + 7 =$ _____

$8000 + 800 + 1 =$ _____

c) $3000 + 70 =$ _____

$6000 + 100 =$ _____

$1000 + 9 =$ _____

$5000 + 50 =$ _____

4. Zerlege die Zahlen.

a) $1204 = 1000 + 200 + 4$ _____

$3809 =$ _____

$8035 =$ _____

$2022 =$ _____

$5701 =$ _____

$899 =$ _____

b) $1002 =$ _____

$4040 =$ _____

$6300 =$ _____

$3009 =$ _____

$730 =$ _____

$8050 =$ _____

5. Ergänze die Zerlegungen.

a) $1234 = 1000 + 200 + 4 +$ _____

$4158 = 4000 + 50 + 8 +$ _____

$6557 = 6000 + 500 + 50 +$ _____

$7777 = 7000 + 700 + 7 +$ _____

b) $2046 = 2000 + 6 +$ _____

$5038 = 30 + 8 +$ _____

$8902 = 900 + 2 +$ _____

$3402 = 3000 + 2 +$ _____

