

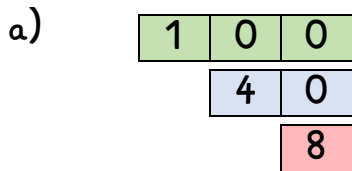
Name:

Klasse:

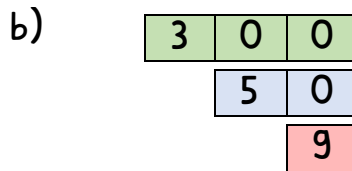
Datum:

Zahlen bis 1000 aufbauen und zerlegen

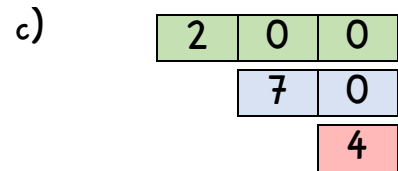
1. Lege die Zahlenkarten zusammen. Welche Zahl entsteht?



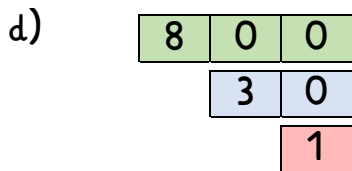
148



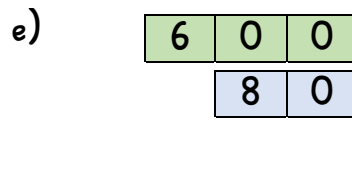
359



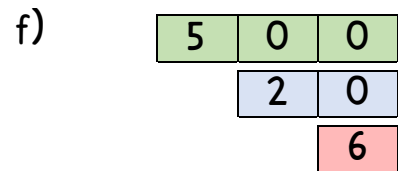
274



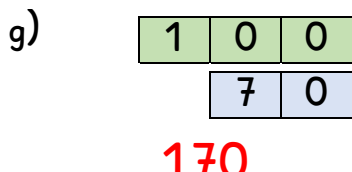
831



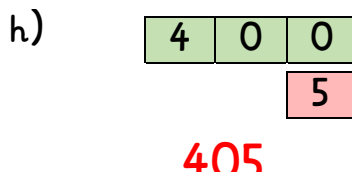
680



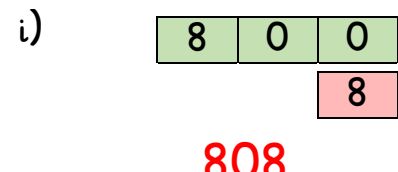
526



170



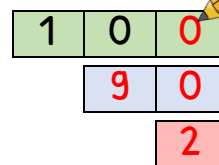
405



808

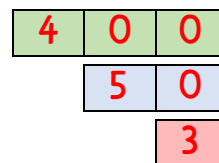
2. Lies die Zahlen und schreibe sie auf.

einhundertzweiundneunzig



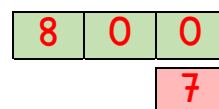
192

vierhundertdreiundfünfzig



453

achthundertsieben



807



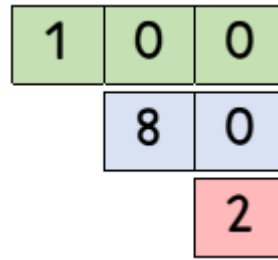
3. Rechne aus. Du kannst die Aufgaben auch mit Zahlenkarten legen.

a) $100 + 80 + 2 = \underline{182}$

$400 + 90 + 7 = \underline{497}$

$600 + 40 + 1 = \underline{641}$

$200 + 30 + 5 = \underline{235}$



b) $900 + 10 + 9 = \underline{919}$

$300 + 6 = \underline{306}$

$900 + 80 = \underline{980}$

$800 + 80 + 1 = \underline{881}$

c) $50 + 4 = \underline{54}$

$900 + 90 + 4 = \underline{994}$

$100 + 1 = \underline{101}$

$400 + 70 = \underline{470}$

4. Zerlege die Zahlen.

a) $204 = \underline{200 + 4}$

$105 = \underline{100 + 5}$

$835 = \underline{800 + 30 + 5}$

$760 = \underline{700 + 60}$

$34 = \underline{30 + 4}$

b) $377 = \underline{300 + 70 + 7}$

$505 = \underline{500 + 5}$

$610 = \underline{600 + 10}$

$87 = \underline{80 + 7}$

$212 = \underline{200 + 10 + 2}$

5. Ergänze die Zerlegungen. Welche Zahl fehlt?

a) $659 = 600 + 9 + \underline{50}$

$248 = 200 + 40 + \underline{8}$

$303 = 300 + \underline{3}$

$777 = 700 + 7 + \underline{70}$

b) $520 = 20 + \underline{500}$

$101 = 1 + \underline{100}$

$460 = 400 + \underline{60}$

$538 = 500 + 8 + \underline{30}$

