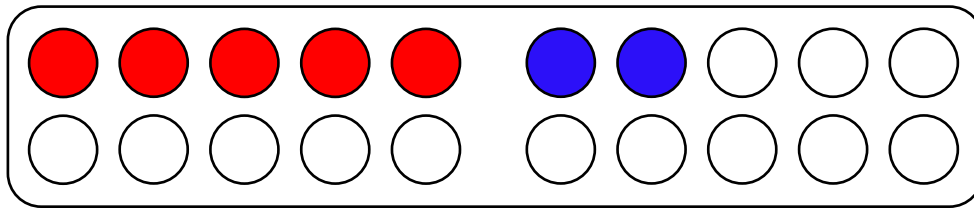


Name:

Klasse:

Datum:

## Zahlen mit der 5 schnell sehen

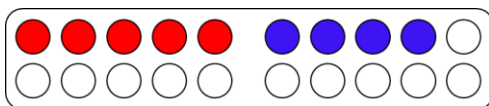


1. Antwort 1: Es gibt 5 rote und 2 blaue Punkte.  
Antwort 2: Nach 5 Punkten kommt eine Lücke.

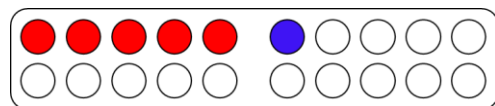
2. In der 7 wurde eine Rechenaufgabe versteckt. Schreibe mit einem blauen Stift auf, welche Zahl für die Aufgabe fehlt.

$$5 + 2 = 7$$

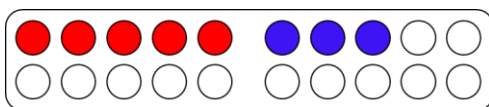
3. Schreibe zu jedem Bild auf, welche Rechenaufgabe du **ohne zu zählen** sehen kannst.



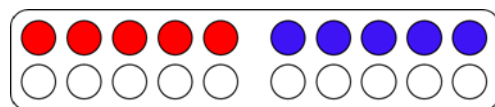
$$5 + 4 = 9$$



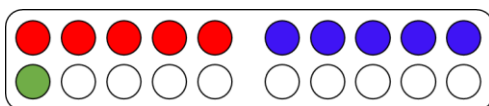
$$5 + 1 = 6$$



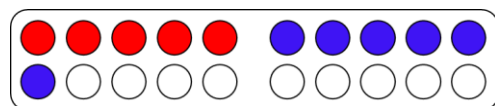
$$5 + 3 = 8$$



$$5 + 5 = 10$$



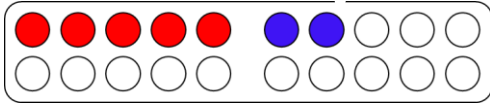
$$5 + 5 + 1 = 11$$



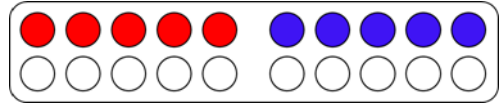
$$5 + 6 = 11$$



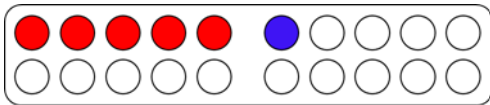
4. Lege jede Zahl so mit Plättchen, dass man sie **schnell sehen** kann, ohne zählen zu müssen. Zeichne sie danach ein und schreibe eine Rechenaufgabe, die in der Zahl versteckt ist.



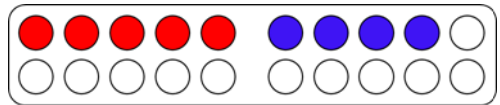
$$\begin{array}{r} 7 \\ \hline 5 + 2 = 7 \end{array}$$



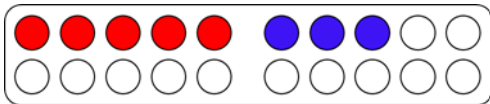
$$\begin{array}{r} 10 \\ \hline 5 + 5 = 10 \end{array}$$



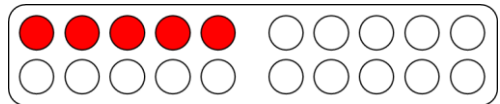
$$\begin{array}{r} 6 \\ \hline 5 + 1 = 6 \end{array}$$



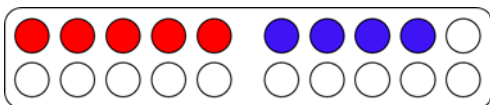
$$\begin{array}{r} 9 \\ \hline 5 + 4 = 9 \end{array}$$



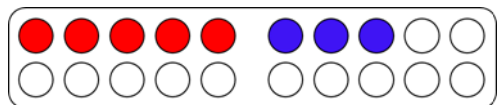
$$\begin{array}{r} 8 \\ \hline 5 + 3 = 8 \end{array}$$



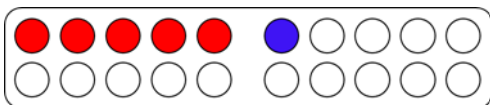
$$\begin{array}{r} 5 \\ \hline 5 + 0 = 5 \end{array}$$



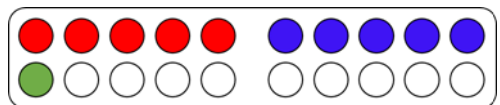
$$\begin{array}{r} 9 \\ \hline 5 + 4 = 9 \end{array}$$



$$\begin{array}{r} 8 \\ \hline 5 + 3 = 8 \end{array}$$



$$\begin{array}{r} 6 \\ \hline 5 + 1 = 6 \end{array}$$



$$\begin{array}{r} 11 \\ \hline 5 + 5 + 1 = 11 \end{array}$$

